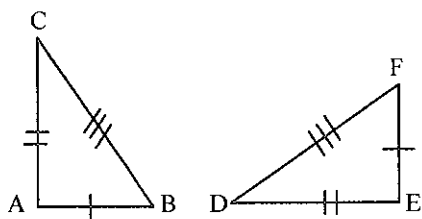


Name: _____

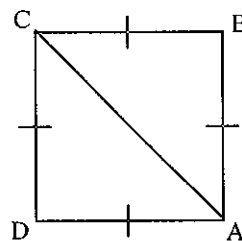
Homework

For each pair of triangles, tell which postulates, if any, make the triangles congruent.

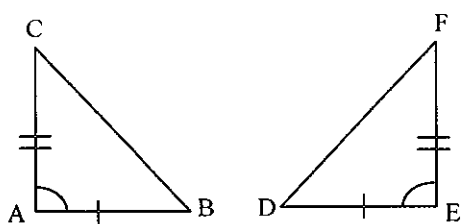
1. $\triangle ABC \cong \triangle EFD$ _____



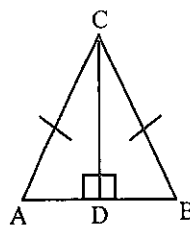
2. $\triangle ABC \cong \triangle CDA$ _____



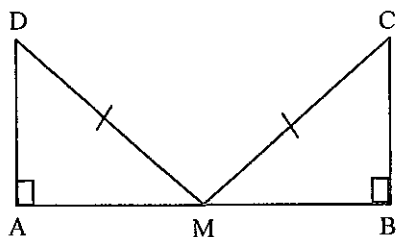
3. $\triangle ABC \cong \triangle EFD$ _____



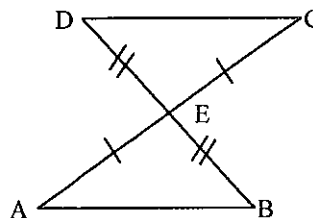
4. $\triangle ADC \cong \triangle BDC$ _____



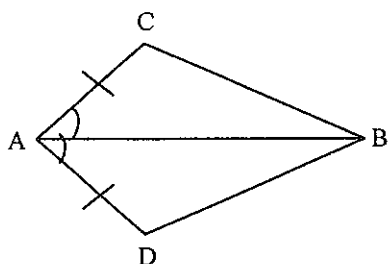
5. $\triangle MAD \cong \triangle MBC$ _____



6. $\triangle ABE \cong \triangle CDE$ _____



7. $\triangle ACB \cong \triangle$ _____



8. $\triangle MNP \cong \triangle MQP$ _____

